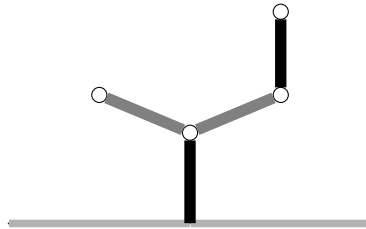
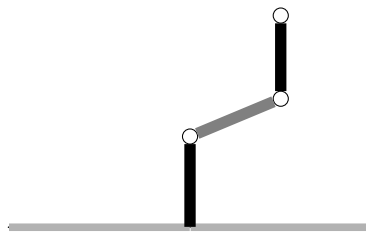


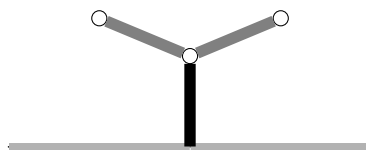
5) Welchen Wert hat das folgende Hackenbush-Spiel (grau = blau, schwarz = rot):



Lösung:



$$\{-1 | -\frac{1}{2}, 0\} = \{-1 | -\frac{1}{2}\} = -\frac{3}{4}$$



$$\{-\frac{1}{2} | 0\} = -\frac{1}{4}$$

$$\text{Wert des Spiels somit: } \{-\frac{3}{4}, -\frac{1}{2} | -\frac{1}{4}, 0\} = \{-\frac{1}{2} | -\frac{1}{4}\} = -\frac{3}{8}$$